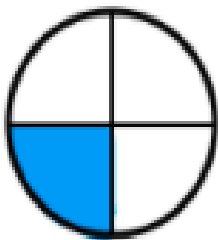
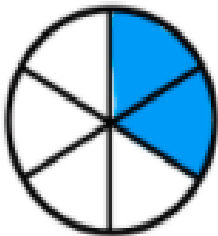

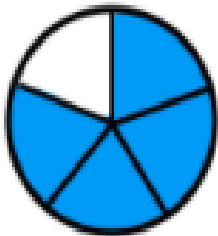
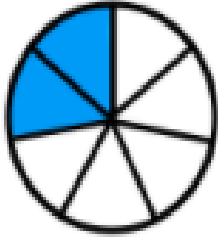




Une cada representación con la fracción correspondiente.



$$\frac{1}{4}$$

$$\frac{2}{6}$$

$$\frac{2}{7}$$

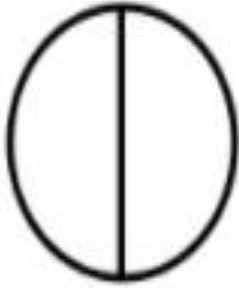
$$\frac{4}{5}$$

$$\frac{2}{3}$$

$$\frac{3}{4}$$



**Pinta** la fracción correspondiente en cada caso.



$$\frac{1}{2}$$



$$\frac{1}{3}$$



$$\frac{3}{6}$$



$$\frac{2}{4}$$



$$\frac{2}{5}$$



$$\frac{5}{6}$$



$$\frac{3}{4}$$



$$\frac{3}{5}$$



$$\frac{2}{3}$$



$$\frac{4}{6}$$



$$\frac{1}{4}$$



$$\frac{4}{5}$$



$$\frac{2}{8}$$



$$\frac{1}{5}$$



$$\frac{4}{7}$$



$$\frac{5}{8}$$



$$\frac{5}{7}$$



$$\frac{4}{6}$$



$$\frac{3}{10}$$



$$\frac{1}{4}$$



$$\frac{1}{6}$$



$$\frac{9}{10}$$



$$\frac{7}{8}$$



$$\frac{6}{8}$$