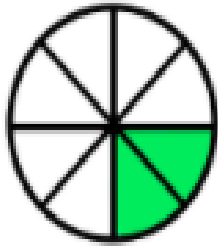
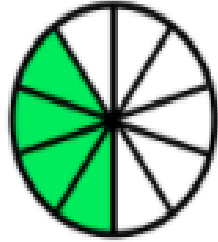


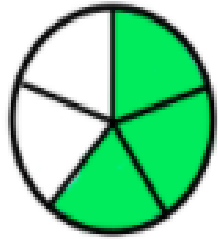
Une cada imagen con su fracción correspondiente.



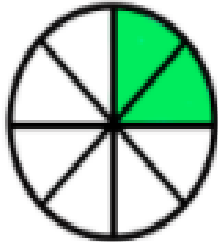
$$\frac{5}{9}$$



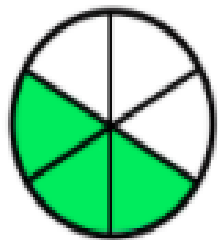
$$\frac{2}{6}$$



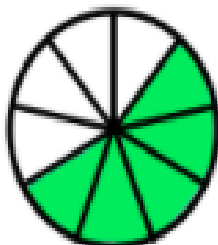
$$\frac{2}{8}$$



$$\frac{3}{5}$$



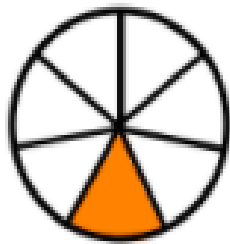
$$\frac{4}{10}$$



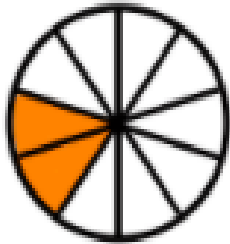
$$\frac{3}{6}$$

edufichas.com

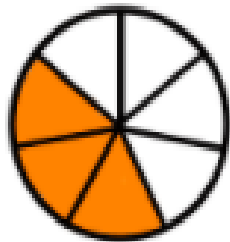
Une cada imagen con su fracción correspondiente.



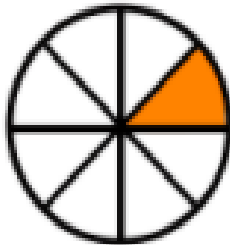
$$\frac{1}{8}$$



$$\frac{3}{7}$$



$$\frac{1}{7}$$



$$\frac{2}{10}$$



$$\frac{1}{9}$$



$$\frac{3}{9}$$

edufichas.com