

Nombre: _____ curso: _____




Objetivo: Reconocer signos mayor y menor que.



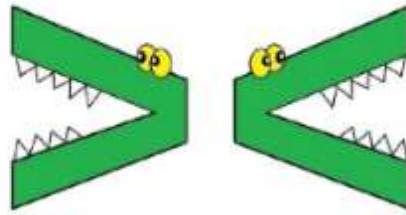
Antes de comenzar la guía de trabajo ver el siguiente link.

<https://www.loom.com/share/7034f0fa4148463b988f90fc3711074f>

ACTIVIDAD:

Indica el signo que corresponda: **>** **0** **<**






12



13



Indica en el que número es mayor o menor que.



35 <input type="checkbox"/> 12	8 <input type="checkbox"/> 10
43 <input type="checkbox"/> 27	86 <input type="checkbox"/> 91
36 <input type="checkbox"/> 41	77 <input type="checkbox"/> 75
28 <input type="checkbox"/> 92	21 <input type="checkbox"/> 53
46 <input type="checkbox"/> 32	56 <input type="checkbox"/> 57
88 <input type="checkbox"/> 56	49 <input type="checkbox"/> 46
22 <input type="checkbox"/> 21	16 <input type="checkbox"/> 18

